









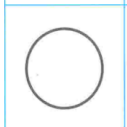
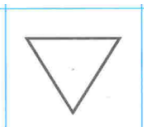
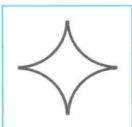
### 1-TOPSHIRIQ

Bo'sh katakchalarga berilgan to'rtta shakllardan qaysi birini qo'yish mumkinligini toping?

















1





A  B  V  S




   

2

A  B  V  S

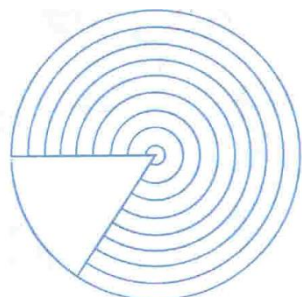
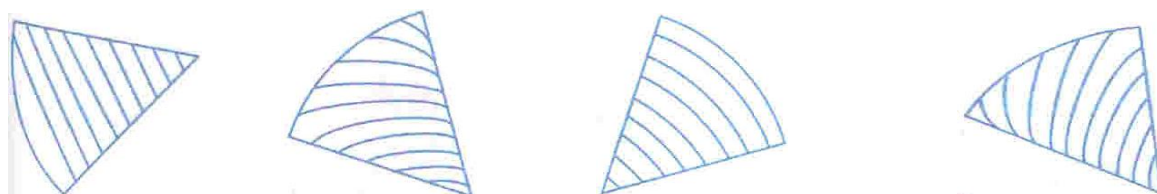
   

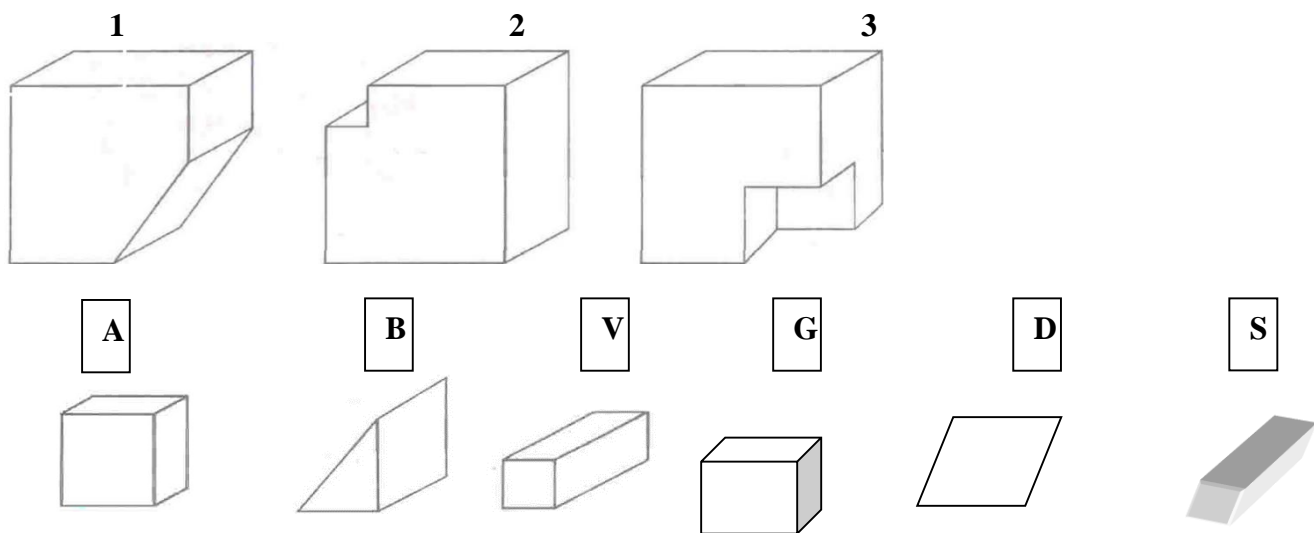
  

### 2-TOPSHIRIQ

Shakllarni to'ldirish uchun qaysi shakl mos keladi?

- 1  2  3  4





### 3-TOPSHIRIQ

Rasmda berilgan hayvonlarga diqqat bilan qarab, ularni to'rtta guruhga ajrating va ustunchalarga nomlarini yozing?



1 - Uy hayvonlari	2 – O'rmon hayvonlari	3 - Issiq o'lkalarda yashaydigan hayvonlar	4 - Sovuq o'lkalarda yashaydigan hayvonlar

--	--	--	--



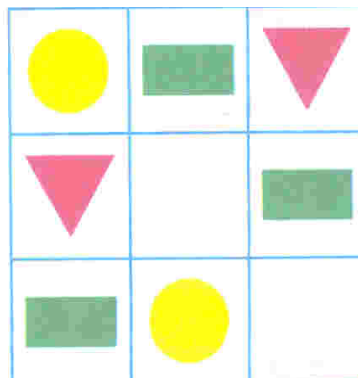

#### 4-TOPSHIRIQ

Mantiqiy masalalar.

1. Qo'llarda 10 ta barmoq bor 10 ta qo'lda nechta barmoq bor?  
\_\_\_\_\_
2. Vrach hakam bemorga 30 daqiqqa oralig'i bilan 3ta ukkol belgiladi. Bemor ularning hammasini qancha vaqt ichida olsa bo'ladi?  
\_\_\_\_\_
3. Yog'ochni 12 bo'lakka bo'lish uchun uni necha marta arralash kerak?  
\_\_\_\_\_

#### 5-TOPSHIRIQ

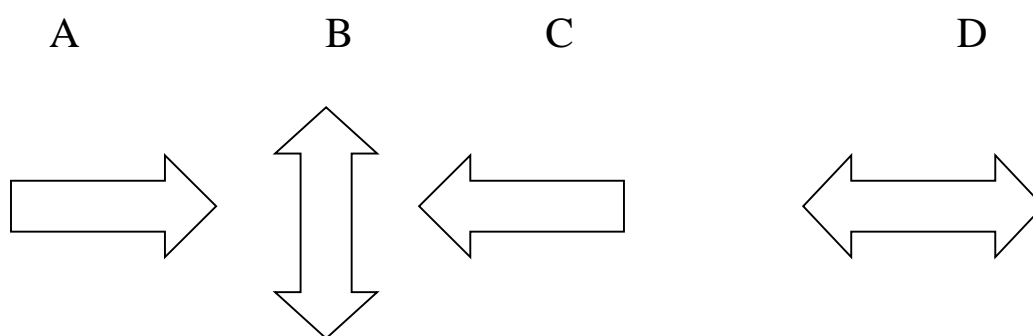
Bo'sh katakchalarga shakllarni shunday joylashtirib chizginki, har bir qatorda va ustunda bir xil rasm bo'lmisligi kerak?



## 6-TOPSHIRIQ

Mantiqiy savollar:

1. Oylar 30-31 kunlardan iborat. Qaysi oyda 28 bor?  
-----
  2. Birdan 100 gacha bo'lgan qatorda nechta 9 raqami bor?  
\_\_\_\_\_
  3. 7ta sham yonib turgan edi, 3tasini o'chirib qo'yishdi. Nechta sham qoladi?  
\_\_\_\_\_
  4. Mamedning 10 ta qo'yi bor edi. 9 dan boshqa hammasi o'lib qoldi. Nechta qo'y qoldi?  
\_\_\_\_\_
5. 2. Ortiqcha shaklni toping?



## 7-TOPSHIRIQ

1

Qo'shish amalini qo'llagan holda jadvalni to'ldiring?

+	9	8	7
6			
7			
8			

2

Ayirish amalini qo'llagan holda jadvalni to'ldiring?

-	5	6	9
9			
7			
9			

### 8-TOPSHIRIQ

Ko'paytiruv amalini qo'llagan holda jadvalni to'ldiring?














*	9	8	7
6			
7			
8			

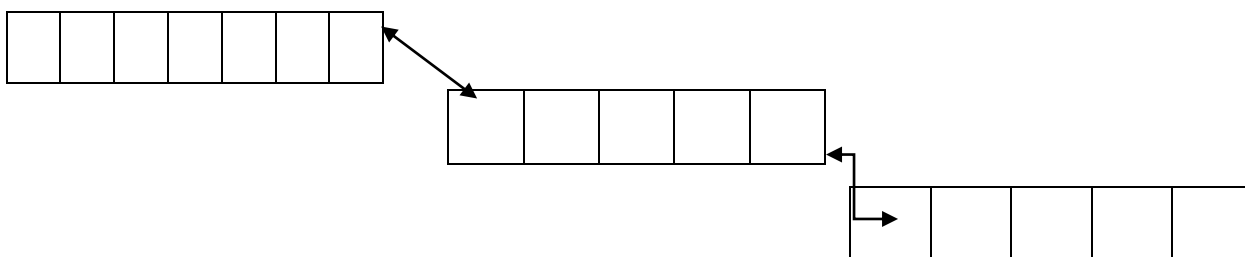
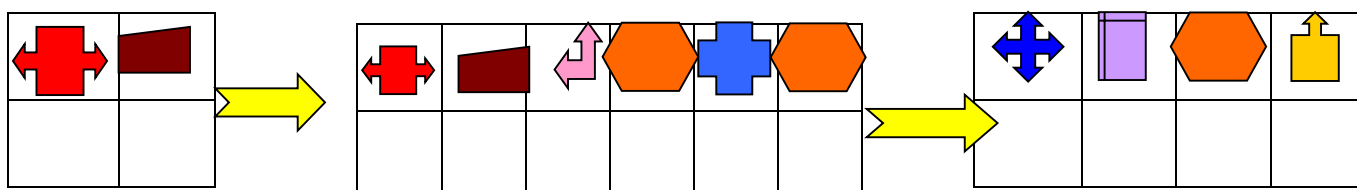
Bo'luv amalini qo'llagan holda jadvalni to'ldiring?

/	5	6	9
10			
18			
27			

### 9-TOPSHIRIQ

Bo'sh katakchalar o'rniga belgilangan harflarni qo'yib chiqsangiz xalq naqlini o'qiysiz?

												
A	D	G	N	I	O	R	S	T	CH	SH	Q	H



### 10-TOPSHIRIQ

Rasmlarni sohasidan kelib chiqan holda birlashtiring.

